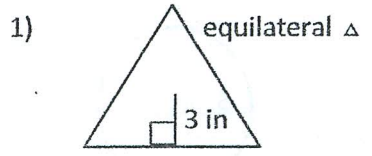


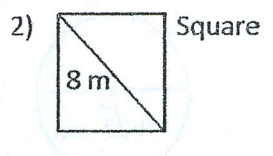
Find the Perimeter/Circumference and Area of each

Name _____



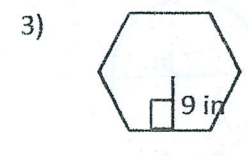
P = _____

A = _____



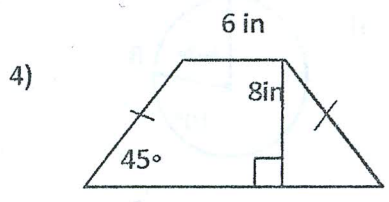
P = _____

A = _____



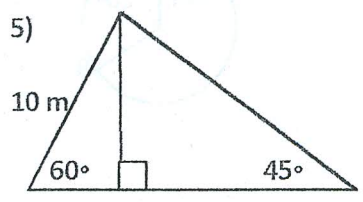
P = _____

A = _____



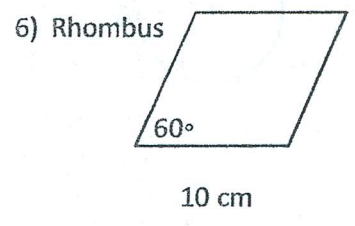
P = _____

A = _____



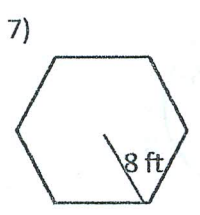
P = _____

A = _____



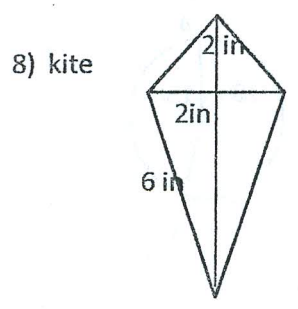
P = _____

A = _____



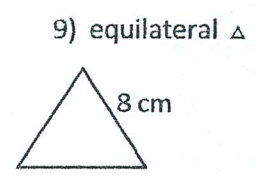
P = _____

A = _____



P = _____

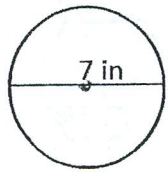
A = _____



P = _____

A = _____

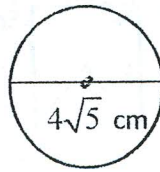
10)



C = _____

A = _____

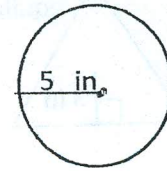
11)



C = _____

A = _____

12)

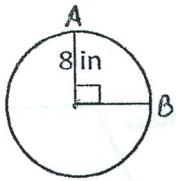


C = _____

A = _____

Find the length of the arc and the area if the sector

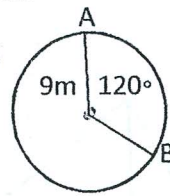
13)



Arc Length _____

Area Sector _____

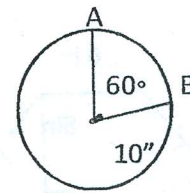
14)



Arc Length _____

Area Sector _____

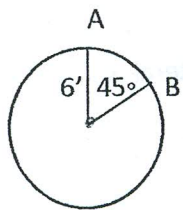
15)



Arc Length _____

Area Sector _____

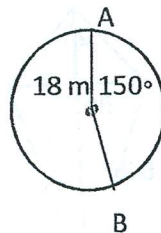
16)



Arc Length _____

Area Sector _____

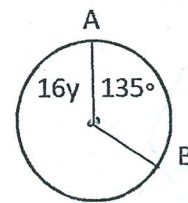
17)



Arc Length _____

Area Sector _____

18)



Arc Length _____

Area Sector _____